

You should now know your **5** times table.

Try these questions to make sure.

$5 \times 9 =$

$5 \times 4 =$

$5 \times 6 =$

$5 \times 1 =$

$5 \times 2 =$

$5 \times 7 =$

$5 \times 3 =$

$5 \times 10 =$

$5 \times 5 =$

$5 \times 8 =$

When you have completed this book, ask your teacher to test you on your **5** times table.

I know my **5** times table.

Pupil's signature _____

Teacher's signature _____

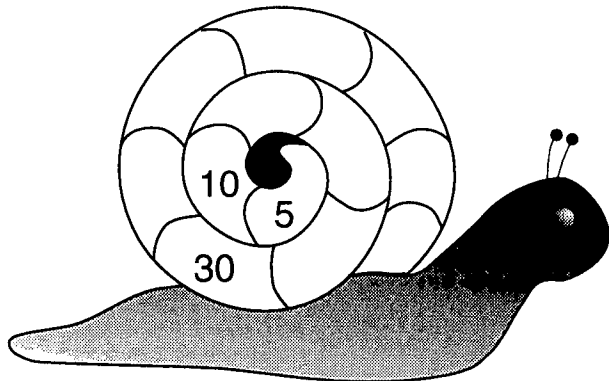
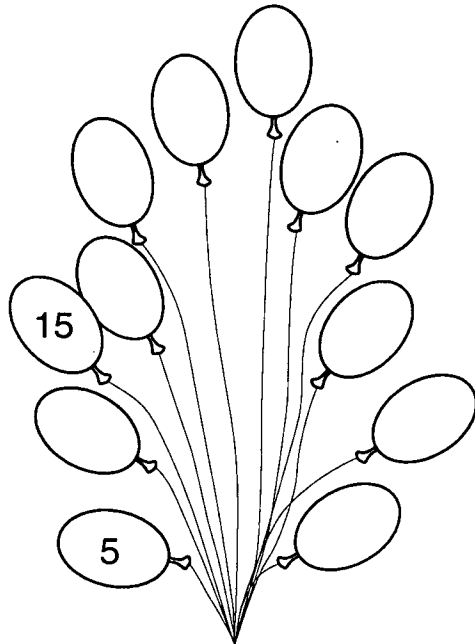
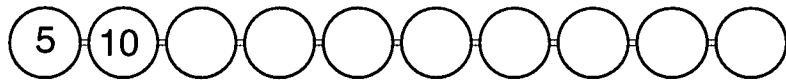
5 Times Table

5

Times Table Booklet

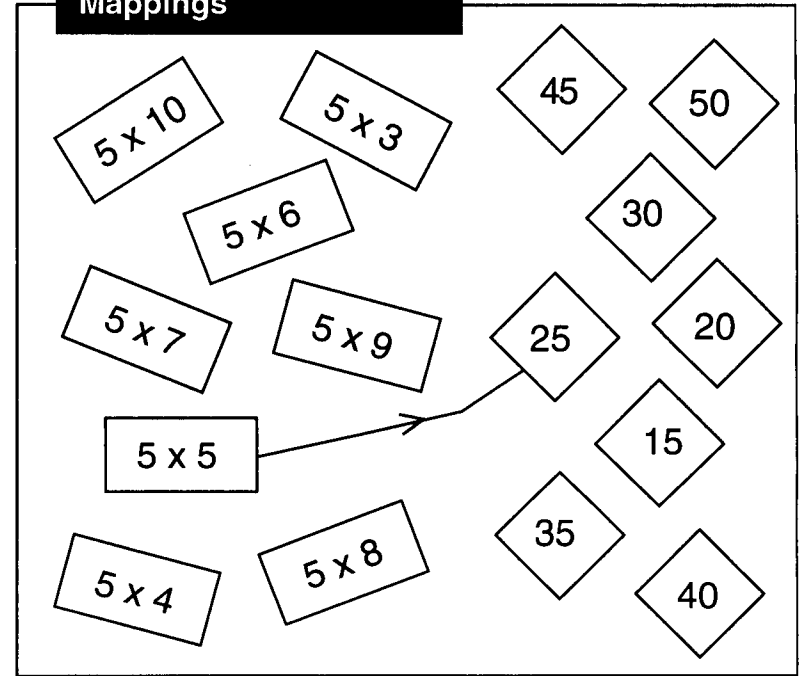
Name _____

Continue the jumping in **5**'s pattern.



Map the multiples of **5**.

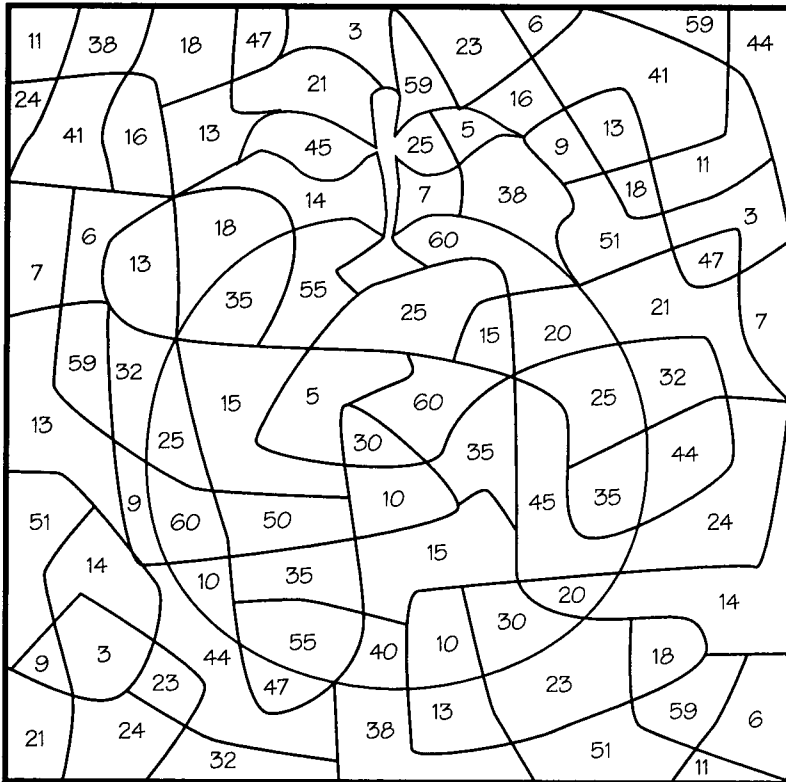
Mappings



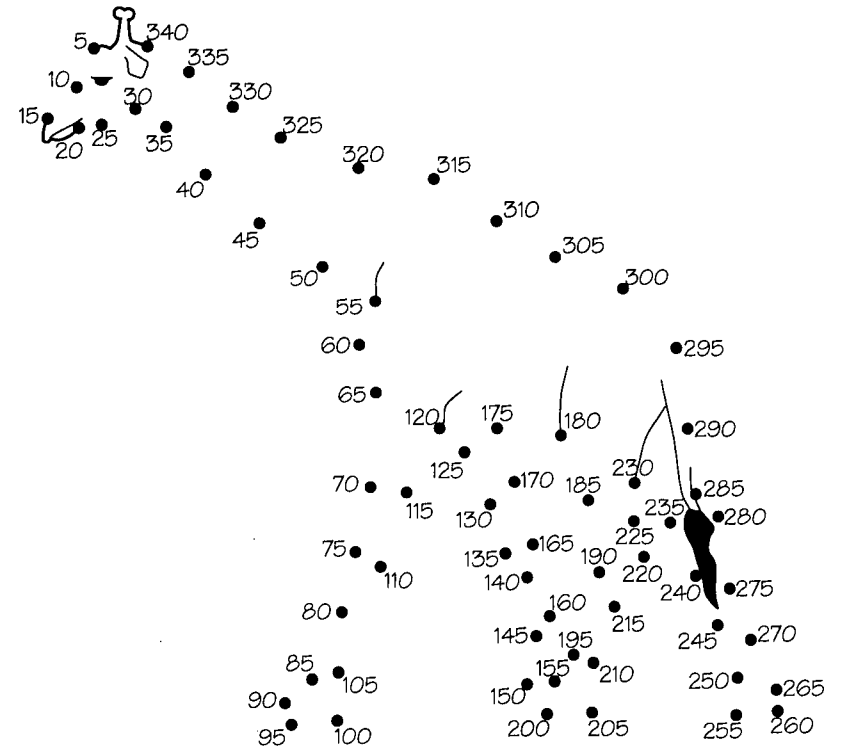
Mark the test paper

- | | |
|------------------------|------------------------|
| 1. $5 \times 6 = 30$ ✓ | 6. $5 \times 8 = 45$ |
| 2. $5 \times 7 = 35$ ✓ | 7. $5 \times 4 = 20$ |
| 3. $5 \times 5 = 25$ | 8. $5 \times 9 = 40$ |
| 4. $5 \times 3 = 15$ | 9. $5 \times 2 = 10$ |
| 5. $5 \times 10 = 50$ | 10. $5 \times 11 = 55$ |

Shade each region which is a multiple of **5**.




Join up the multiples of **5** in order.



Use the multiples of **5**.

Fill in the steps on each ladder.



Complete the **5** times table.

$5 \times 1 = 5$

$5 \times 7 = \square$

$5 \times 2 = 10$

$5 \times 8 = \square$

$5 \times 3 = \square$

$5 \times 9 = \square$

$5 \times 4 = \square$

$5 \times 10 = \square$

$5 \times 5 = \square$

$5 \times 11 = \square$

$5 \times 6 = \square$

$5 \times 12 = \square$

Shade all the multiples of **5**.

1	2	3	4	5	6	7	8	9	10
11	12	13	14	15	16	17	18	19	20
21	22	23	24	25	26	27	28	29	30
31	32	33	34	35	36	37	38	39	40
41	42	43	44	45	46	47	48	49	50
51	52	53	54	55	56	57	58	59	60
61	62	63	64	65	66	67	68	69	70
71	72	73	74	75	76	77	78	79	80
81	82	83	84	85	86	87	88	89	90
91	92	93	94	95	96	97	98	99	100